

PATTERN & MARKING SCHEME				
Section	(1) General Awareness	(2) Current Affairs	(3) Life Skills	(4) Achievers Section
No. of Questions	30	10	5	5
Marks per Ques.	1	1	1	3

**SYLLABUS**

Plants and Animals, India and the World, Science and Technology, Earth and its Environment, Universe, Language and Literature, Entertainment, Social Studies, Sports, Quantitative Aptitude and Reasoning, Current Affairs, Life Skills (Empathy, Effective Communication, Critical Thinking, Creative Thinking, Coping with Stress, Decision Making, Problem Solving, Interpersonal Skills, Managing Emotions, Self-awareness).

**Achievers Section** : Higher Order Thinking Questions from the above given Syllabus.

1. Identify the given award name and the field in which it is given.



- (A) Param Vir Chakra-Highest military award  
(B) Dhyan Chand Award-Highest award for lifetime achievement in sports and games  
(C) Sahitya Akademi Award-Literary honour given for outstanding work in literature  
(D) None of these

2. The female part of a flower is called \_\_\_\_\_.  
(A) Pistil  
(B) Anther  
(C) Petal  
(D) Corolla

3. Which of the following is not biodegradable?  
(A) The food we eat  
(B) Plastic bags in which food is carried  
(C) The peel of fruits and vegetables  
(D) The animal protein we eat

4. Which great person was nick named 'Mickey Mouse' by Sarojini Naidu?  
(A) Jawaharlal Nehru  
(B) Sardar Patel

- (C) Lord Mountbatten  
(D) Mohandas K. Gandhi

5. The headquarter of UNO is located in \_\_\_\_\_.  
(A) London, England  
(B) New York City, USA  
(C) Brisbane, Australia  
(D) Madrid, Spain



6. What is a common character of the above shown animals?  
(A) They all live in water.  
(B) They all lack backbone.  
(C) They all have scales on their body.  
(D) They all lay eggs to reproduce.

7. Which of the following is not a natural calamity?  
(A) Tornado  
(B) Earthquake  
(C) Flood  
(D) Dengue

8. Duration of hockey game in 2016 Olympics was \_\_\_\_\_.  
(A) 80 min  
(B) 70 min  
(C) 60 min  
(D) 170 min

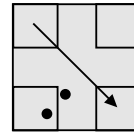
## ACHIEVERS SECTION

9. Identify the name of adjoining yoga asana.

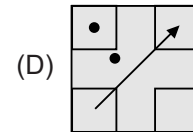
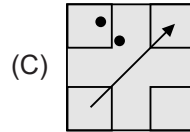
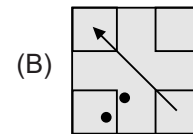
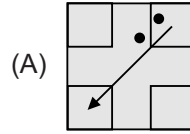


- (A) Tadasana
- (B) Vrikshasana
- (C) Pranayama
- (D) Bhujangasana

10. Choose the correct water image of figure (X).



(X)



-----  
SPACE FOR ROUGH WORK

### ANSWERS

IGKO – 1. (A) 2. (A) 3. (B) 4. (D) 5. (B) 6. (B) 7. (D) 8. (C) 9. (B) 10. (C)